

# Three Little Pigs I Spy and Add to 20

Count the number of each picture needed in the addition number sentence. Write the numbers in the boxes to create and solve an addition number sentence.



+




=




+



=



+



=




+



=



+



=